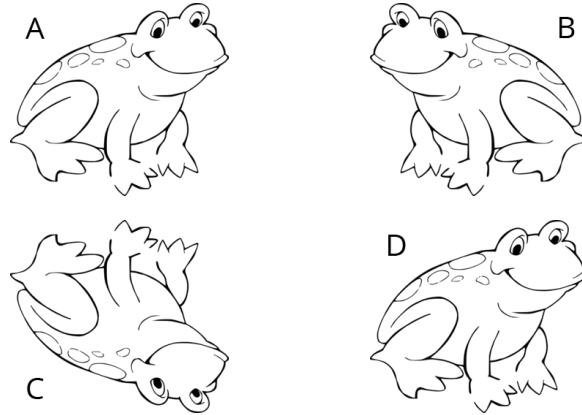





Transforming frogs

This task is about identifying different types of transformations.






Use the diagram above to help you answer the following questions.




a) Frog A can be **translated** on which other frog?

<input type="radio"/> 	<input type="radio"/> 	<input type="radio"/> 
---	---	---

b) Frog A can be **reflected** on which **two** frogs?

<input type="radio"/> 	<input type="radio"/> 	<input type="radio"/> 
---	---	---

c) Which frog can Frog C be **rotated** on?

<input type="radio"/> 	<input type="radio"/> 	<input type="radio"/> 
---	---	---