

Some kind of transformation

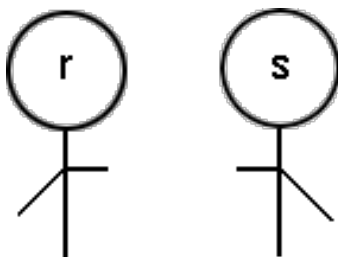
This task is about identifying which transformation has been used on a shape.

Look at each pair of shapes named *r* and *s*.

Think about how shape "*r*" transformed into shape "*s*".

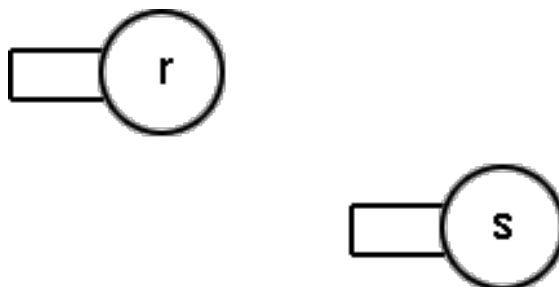
Select **one** transformation (reflection/rotation/translation) for each pair.

a)



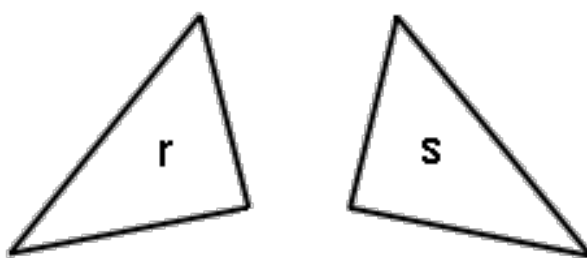
reflection rotation translation

b)



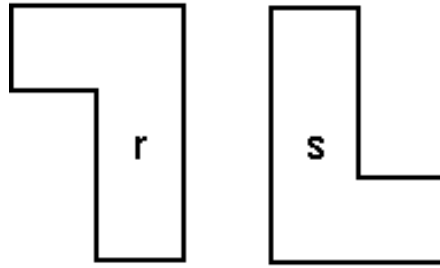
reflection rotation translation

c)



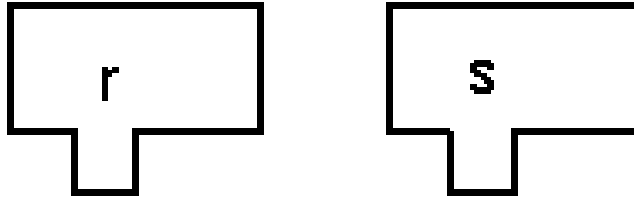
reflection rotation translation

d)



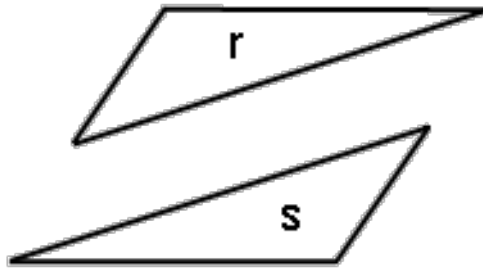
reflection rotation translation

e)



reflection rotation translation

f)



reflection rotation translation