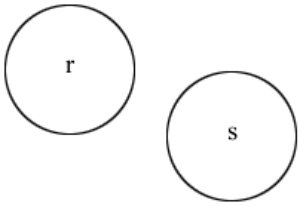


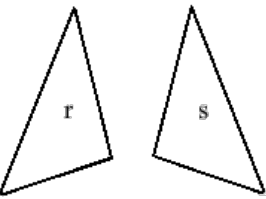
Reflection, rotation or translation

This task is about transformations with shapes.

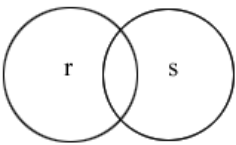
Study the following shapes and identify whether it shows a **reflection**, **translation** or **rotation**.



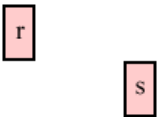
a) Transformation: *reflection/ rotation/ translation*



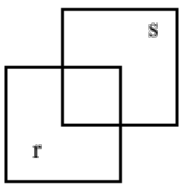
b) Transformation: *reflection/ rotation/ translation*



c) Transformation: *reflection/ rotation/ translation*



d) Transformation: *reflection/ rotation/ translation*



e) Transformation: *reflection/ rotation/ translation*