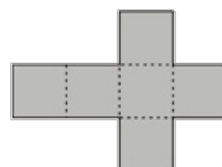
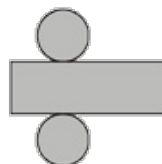
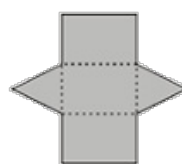
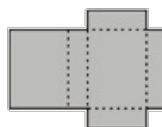
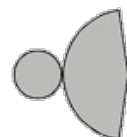
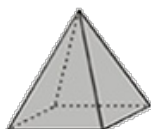
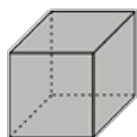
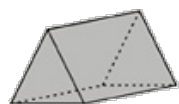


# Shapes and nets

This task is about matching 3-D shapes to their nets.

## Questions/instructions

Draw a line from each 3D shape to the net that would make the shape.



Published on *Assessment Resource Banks* (<https://arbs.nzcer.org.nz>)