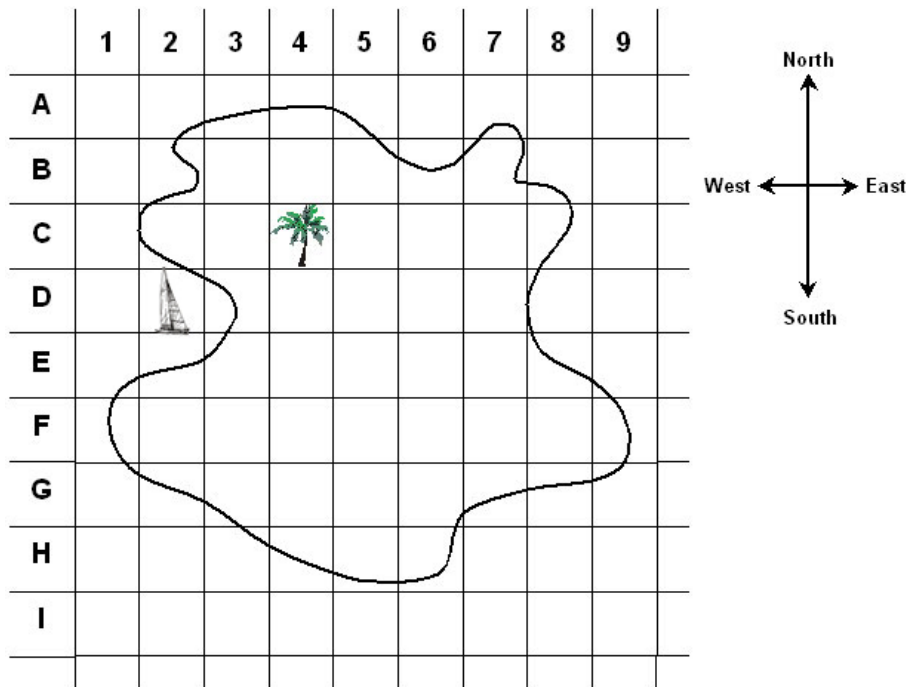




# Treasure Island

This task is about using map to locate positions.

## Questions/instructions



1. You have landed on the  on Treasure Island at C,4.
2. To get to the treasure go 2 squares east, then 3 squares south.
3. Put a × in the square where the treasure is.
4. What are the coordinate numbers of that square? \_\_\_\_\_ , \_\_\_\_\_

Now you need to go to the 

5. Write down the way you would go to the boat using the points of the compass.

\_\_\_\_\_

6. What square is the boat in? \_\_\_\_\_ , \_\_\_\_\_