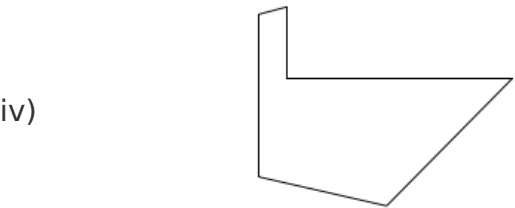
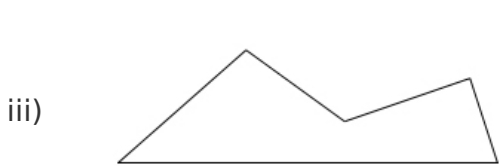
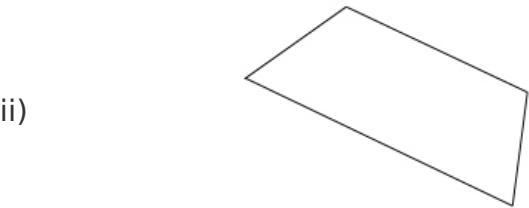
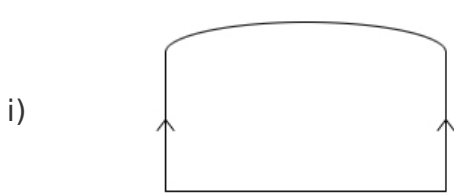


Parallel lines

This task is about perpendicular and parallel lines.

- a) Mark with arrows all the pairs of parallel lines on the shapes below.
The first one has been done for you.



- b) Mark with a right-angle symbol all the lines that are perpendicular to each other on the shapes below.
The first one has been done for you.

