

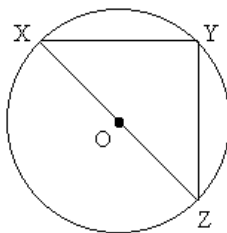
Finding right angles

This task is about angle properties.

Name all the right angle(s) in each of the following diagrams.

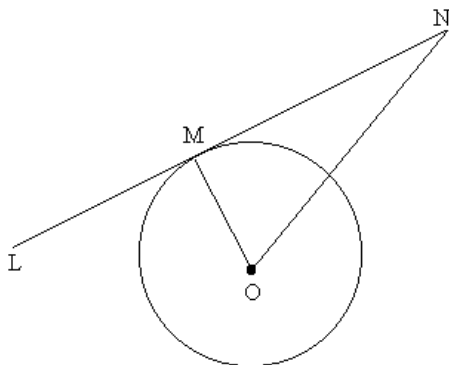
The centre of each circle is labelled O.

a)



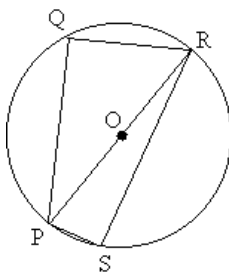
Right angle(s):

b)



Right angle(s):

c)



Right angle(s):