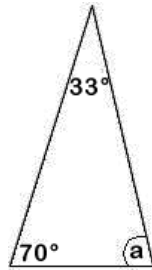
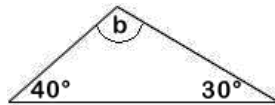


## Working out angles II

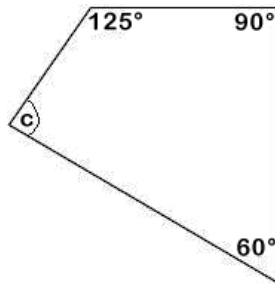
This task is about working out unknown angles.



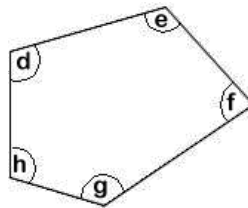
a) What is the size of the angle marked 'a'?  degrees



b) What is the size of the angle marked 'b'?  degrees



c) What is the size of the angle marked 'c'?  degrees



d) What is the sum of the five angles marked 'd', 'e', 'f', 'g', and 'h'?  degrees

Published on Assessment Resource Banks (<https://arbs.nzcer.org.nz>)