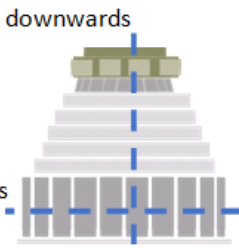




Building cross sections

This task is about drawing cross-sections of buildings.

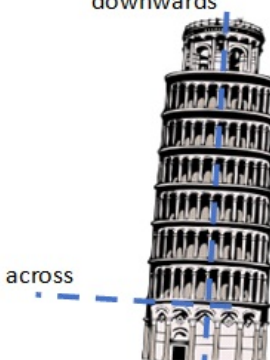

Imagine that each of these buildings has been sliced in half downwards from top to bottom, and across from left to right. In the spaces provided, draw what these slices would look like. Some drawings have already been done for you.

a)

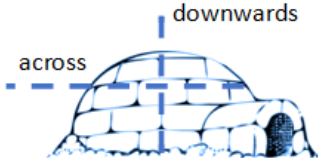
	Downwards	Across
		

b) The *downwards* slice has already been drawn.

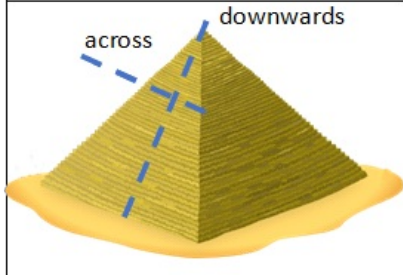
Draw what the *across* slice would look like.

	Downwards	Across
		

c) Draw what the *downwards* and *across* slices would look like.

	Downwards	Across
		

d) Draw what the *downwards* and *across* slices would look like.

	Downwards	Across
		

Published on <https://newzealandcurriculum.tahurangi.education.govt.nz>