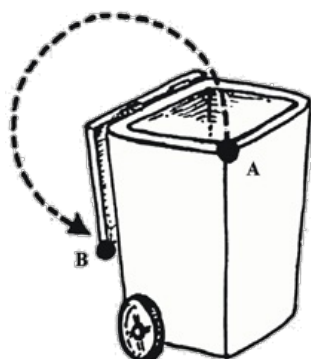
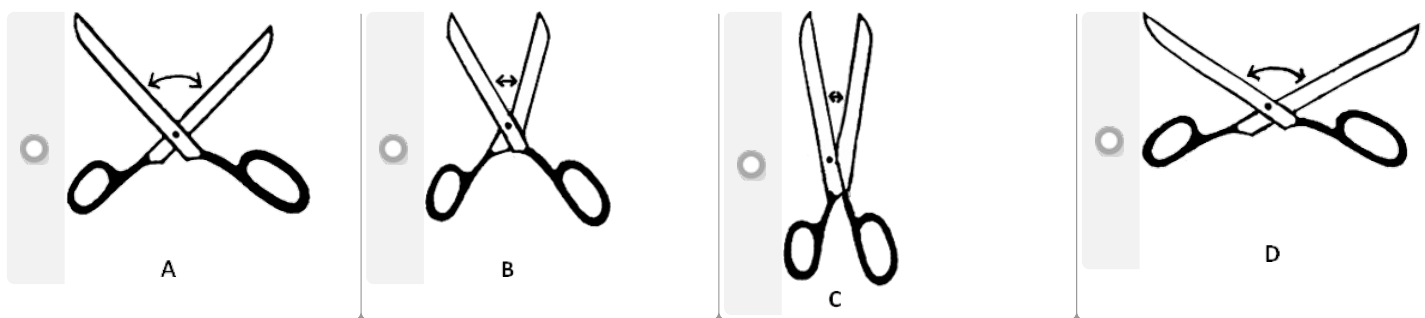


# What's the angle?


This task is about identifying different angles.

a. Which pair of scissors shows an angle between the blades of about  $45^\circ$ ?



b. Through how many degrees does the rubbish bin lid move when it is closed (at point A) to when it is fully open (at point B)?

degrees



c. Through how many degrees does the gate turn from when it is shut (at point A) to when it is open (at point B)?

degrees