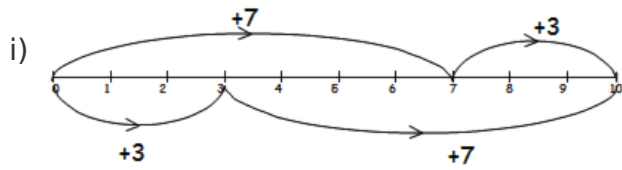


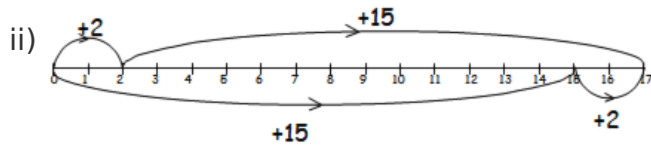
Commutative number lines

This task is about using number lines to show number sentences.

a) Write the number sentence that each number line shows in the boxes below.

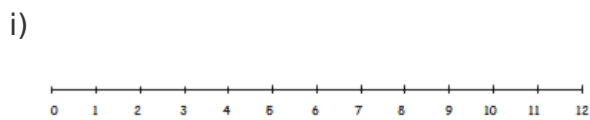


| |
|-----------------------------|
| $7 + 3 = \underline{\quad}$ |
| $+ \underline{\quad}$ |
| $\underline{\quad}$ |

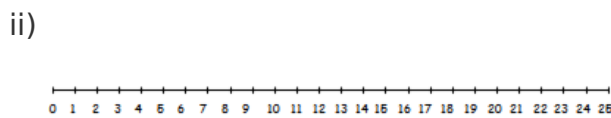


| |
|---|
| $\underline{\quad} + \underline{\quad} = \underline{\quad}$ |
| $+ \underline{\quad}$ |
| $\underline{\quad}$ |

b) Use the number lines below to draw in each number sentence.



| |
|---------------------|
| $4 + 8 = 8$ |
| $+ 4$ |
| $\underline{\quad}$ |



| |
|---------------------|
| $16 + 9 = 9 +$ |
| 16 |
| $\underline{\quad}$ |