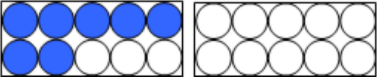
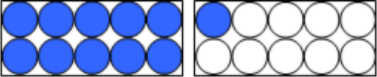


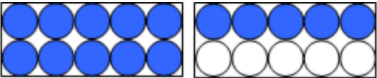
Tens frames to twenty

This task is about using tens frames to add and take away numbers to 20.

a) Write the number that is shown by the number of shaded dots on these tens frames.

i) 

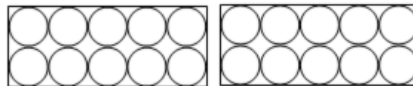
ii) 

iii) 



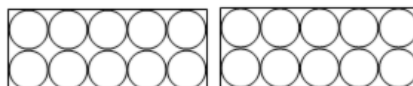
b) Ruma Whitu is going on a trip. All students need to pay \$20.

i) Rawiri has paid \$9. Use the tens frames to show how much he has paid.



ii) How much does Rawiri still have to pay?

c) i) Filemu has paid \$13. Use the tens frames to show how much she has paid.



ii) How much does Filemu still have to pay?