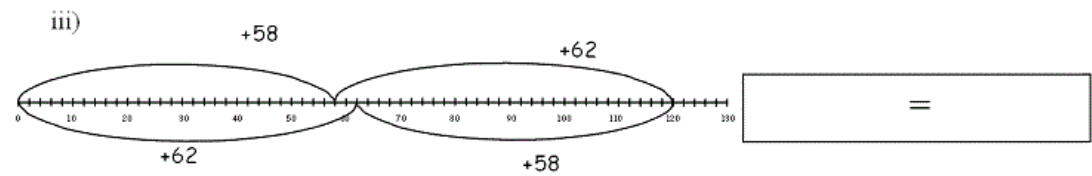
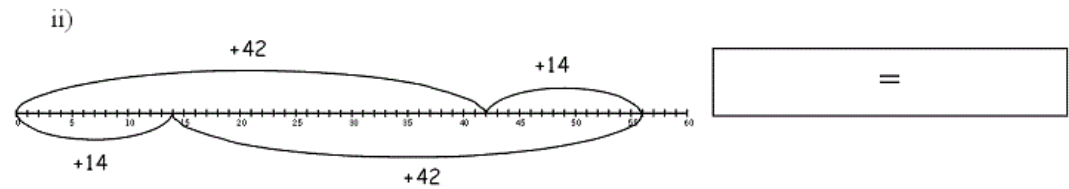
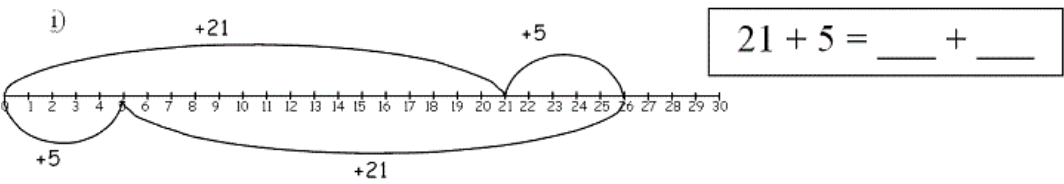


# Commutative number lines II

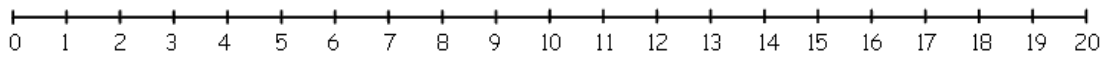
This task is about using number lines to show number sentences.

a) Write the number sentence that each number line shows in the boxes below.

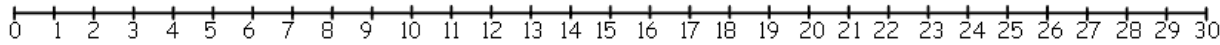


b) Use the number lines below to draw in each number sentence.

i)  $8 + 7 = 7 + 8$



ii)  $16 + 9 = 9 + 16$



iii)  $13 + 19 = 19 + 13$

