

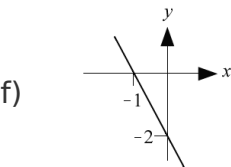
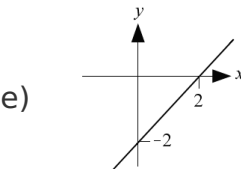
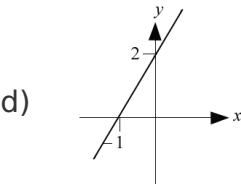
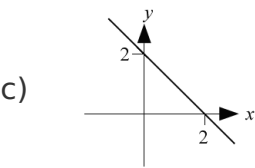
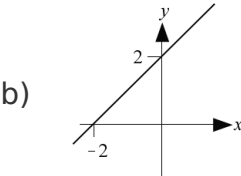
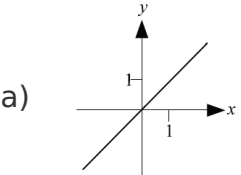
Matching graphs

This task is about matching graphs to their equations.

Write down the correct equation next to each graph.

Choose each equation from the box. Only six equations will be used.

Graphs



Equations

$y = 2x$

$y = 2x + 2$

$y = x + 2$

$y = -2x$

$y = -x - 2$

$y = -2x + 2$

$y = -2x - 2$

$y = 2x - 2$

$y = -x$

$y = x$

$y = -x + 2$

$y = x - 2$
