

# Birthdates, temperature and area

This task is about measurement problems involving birth dates, temperatures and area.

## Questions

### BIRTH DATES



- a) Tui's birthday is the 25th of August. How many months does she have to wait until Christmas day, the 25th December?

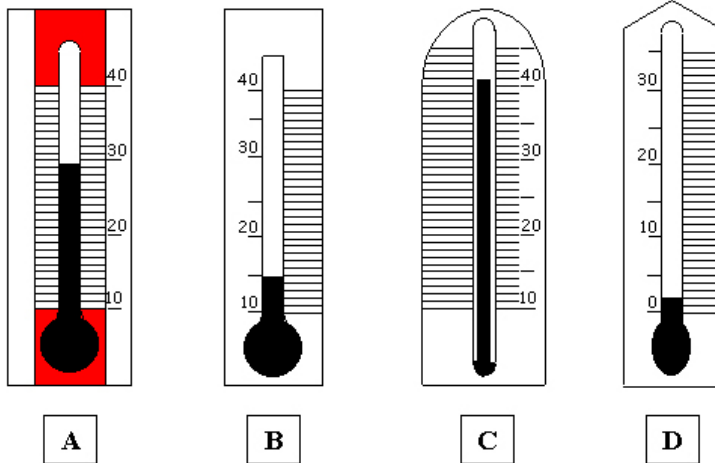
Answer: \_\_\_\_\_ months.

Sara was born on the 20th June 1990. Her friend was born on the 20th March 1991.

- b) Is her friend younger or older? \_\_\_\_\_
- c) How many months younger or older? Answer: \_\_\_\_\_ months
- d) Jo was born on the 8th May 1989. How old will she be on the 8th December 1997?

Answer: \_\_\_\_\_ years \_\_\_\_\_ months.

### THERMOMETERS

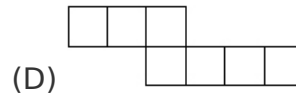
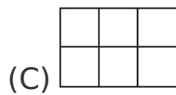
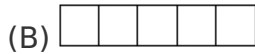
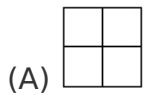


- e) Write the letters for the thermometers in order, from the coldest to the hottest temperature.


coldest     hottest

## AREA

f) Which has the largest area?



g) How many metres right around the edge of the garden?



- (A) 15
- (B) 30
- (C) 40
- (D) 50