


# Describing 2-D shapes

---

This task is about describing how 2-D shapes look.

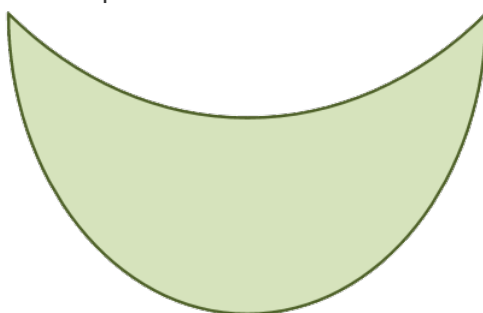
a) Complete the sentences about the shape below.



This shape has  straight sides,  curved sides, and  corners.

What else do you notice about the shape?

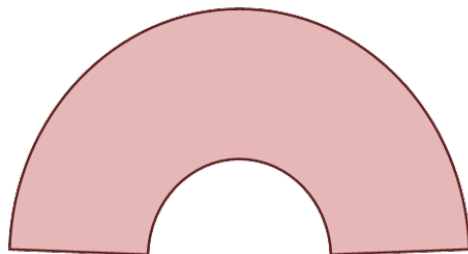
b) Complete the sentences about the shape below.



This shape has  straight sides,  curved sides, and  corners.

What else do you notice about the shape?

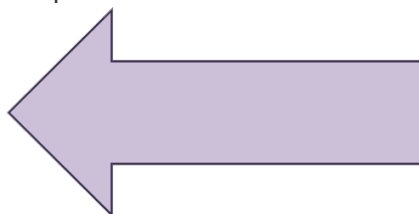
c) Complete the sentences about the shape below.



This shape has  straight sides,  curved sides, and  corners.

What else do you notice about the shape?

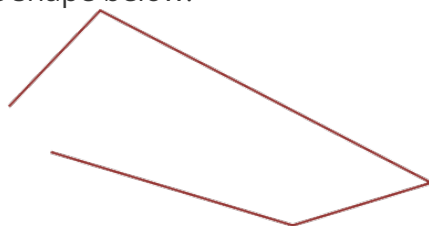
d) Complete the sentence about the shape below.



This shape has  straight sides,  curved sides, and  corners.

What else do you notice about the shape?

e) Complete the sentence about the shape below.



This shape has  straight sides,  curved sides, and  corners.

What else do you notice about the shape?