

Using a thermometer

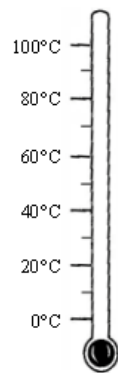
a) Predict the temperature of each of these liquids:

- cold tap water _____
- hot tap water _____
- water from the refrigerator _____
- freshly boiled water _____

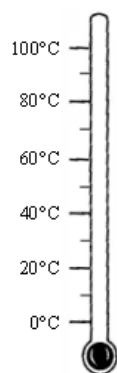
b) Use a thermometer to measure the temperature of these liquids.

- cold tap water _____ °C
- hot tap water _____ °C
- water from the refrigerator _____ °C
- freshly boiled water _____ °C

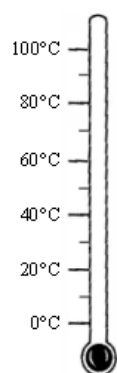
c) Draw the temperature of each of the liquids on the thermometers below.



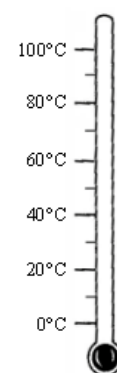
Cold tap water



Hot tap water



Refrigerated water



Freshly boiled water