

Electricity: Keeping safe

This task is about conducting electricity and safety.






line carrying 11,000 volts

- a) How is it that a bird can perch on a high-voltage power line without being electrocuted?
Select the answer below you think is right

- ☐ "Birds' claws don't conduct electricity."
- Ani
- ☐ "Only humans get electrocuted."
- Cam
- ☐ "It is easier for the electricity to travel along the wire than through the bird."
- Ihipera

- b) Select the pictures where there is a danger of being electrocuted.



- c) Explain how the electricity will travel in one of the pictures you chose.

Published on Assessment Resource Banks (<https://arbs.nzcer.org.nz>)