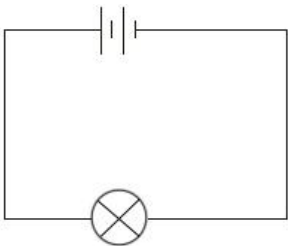


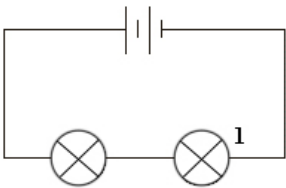
Bright lights

This task is about how the layout of an electric circuit affects the bulb.

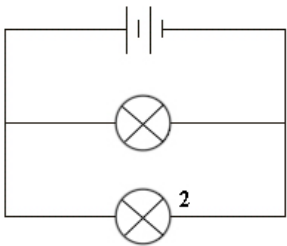
Circuit A



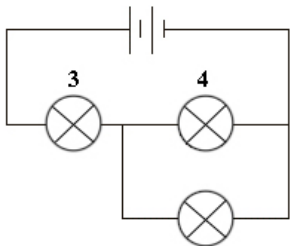
How do each of the bulbs (numbered 1 to 7) in the circuits below glow **compared** to the bulb in Circuit A? Use the words: **brighter**, **same as**, **dimmer**, or **not going**.



1: _____

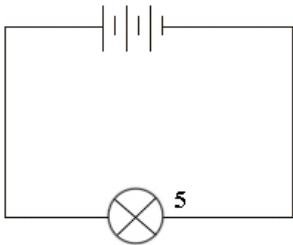


2: _____

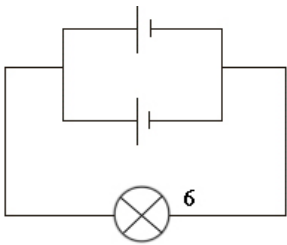


3: _____

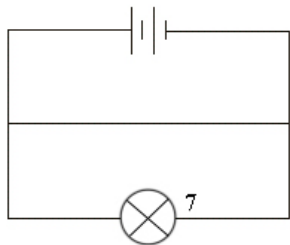
4: _____



5: _____



6: _____



7: _____