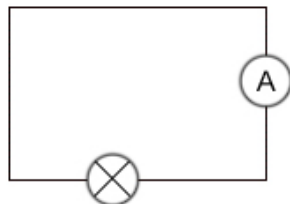


What is wrong?

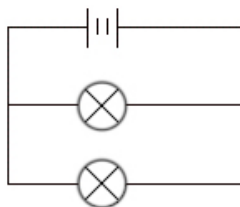
This task is about working electric circuits.

Explain what is wrong with each of the following circuits.

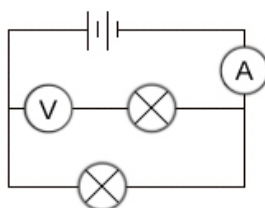
a) What is wrong with this circuit?



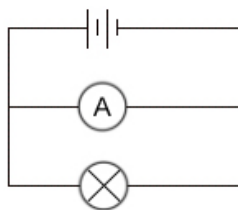
b) What is wrong with this circuit?



c) What is wrong with this circuit?



d) What is wrong with this circuit?



e) What is wrong with this circuit?

