


Burning candles

This task is about using your science knowledge to make a prediction about burning.


Three candles, all exactly the same, are lit at the same time and put in 3 different containers. There is no wind in the room.

In which order will the candles most likely go out?


Put them in order from least likely to most likely.



Candle in a large closed box



Candle in a small closed box



Candle in a small open box

b) Explain why the answer you chose is correct.

Published on *Assessment Resource Banks* (<https://arbs.nzcer.org.nz>)