


Atoms, elements and formulae

This task is about diagrams and chemical formulae for compounds.


These symbols represent atoms of different elements.

 Oxygen (O)

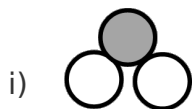
 Hydrogen (H)

 Carbon (C)

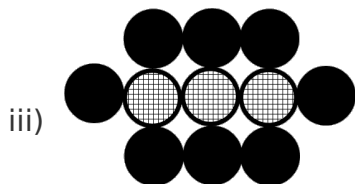
 Sulphur (S)

 Sodium (Na)

a) Write the formula for each of the following.







b) Using the symbols above, draw diagrams to represent each of the following.

i) H_2O



ii) H_2SO_4



iii) carbon dioxide

