

Kingfishers

This task is about reading graphs and creating a food chain.

a) i) Draw arrows to match the kingfisher pictures to a pie graph that best shows what they mainly eat.

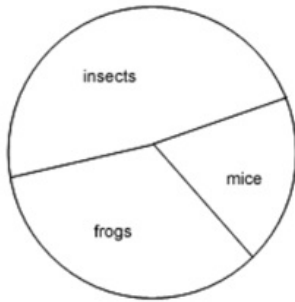
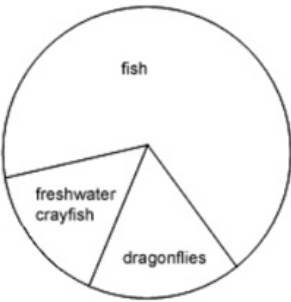
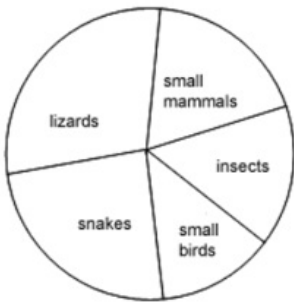
A. This kingfisher is found near rivers, lakes, and ponds



B. This kingfisher is found in forests.



C. This kingfisher is usually found far from water.



ii) Explain why you chose the particular pie graph for each Kingfisher.

Kingfisher A

Kingfisher B

Kingfisher C

b) All groups of kingfishers feed on animals only. Animals which have this kind of diet are called ...

☐ carnivores

☐ producers

☐ omnivores

☐ herbivores

c) All living things are part of a food chain and their place in the food chain is related to their diet. Use the information from the pie graphs and your own background knowledge of kingfishers to fill in the gaps in this food chain with labels.

