





# Paradise Ducks' life cycle

This task is about the life cycle of a paradise duck.

a) Sort the four pictures of the Paradise Duck in order from the youngest to oldest.





b) Write down some ways that the Paradise duck has changed from the first picture to second picture.



c) Write down some ways that the Paradise duck has changed from the first picture to second picture.



d) Write down some ways that the Paradise duck has changed from the first picture to second picture.



d) Paradise Ducks belong to the larger animal group known as birds.

Write down **three** ways that you can tell a duck is a bird.

1.
2.
3.

Published on *Assessment Resource Banks* (<https://arbs.nzcer.org.nz>)