
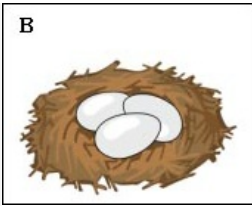


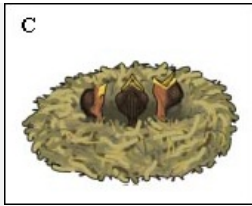
Keeping safe

This task is about life cycles and survival.

a) i) Choose a time when this animal's survival is most in danger. (*select one*)

A 

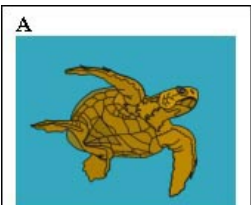
B 

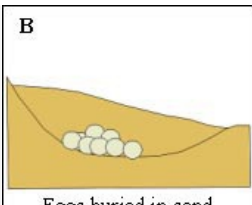
C 

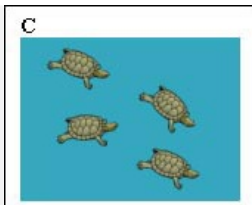
Why is this animal not safe at this time?

ii) Explain **one** special feature that helps this animal to survive at this time.

b) i) Choose a time when this animal's survival is most in danger.

A 
Adult turtle


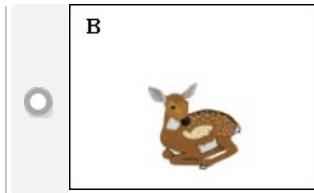
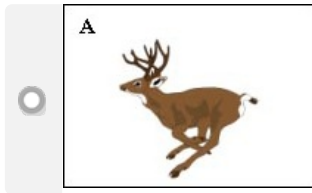
B 
Eggs buried in sand

C 
Baby turtles in the sea

Why is this animal not safe at this time?

ii) Explain **one** special feature that helps this animal to survive at this time.

c) i) Choose a time when this animal's survival is most in danger.



Why is this animal not safe at this time?

ii) Explain **one** special feature that helps this animal to survive at this time.

Published on <https://newzealandcurriculum.tahurangi.education.govt.nz>