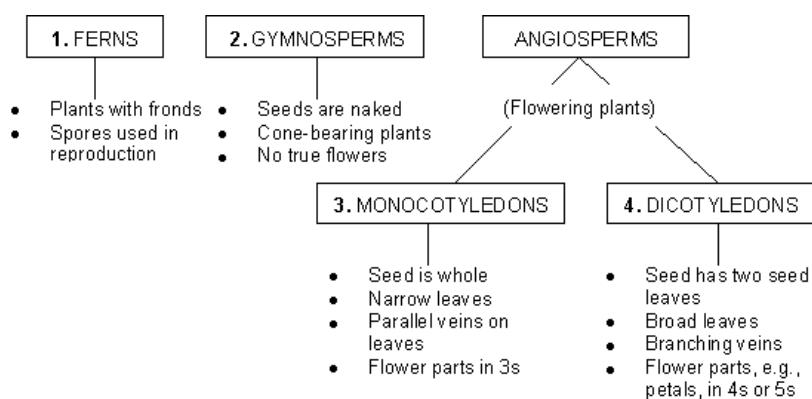


Classifying plants

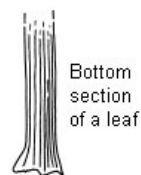
This task is about using a classification key to identify plants.



Under each diagram, write the name or number of the major plant group that the plant belongs to.




a) _____



Bottom section of a leaf

b) _____



c) _____



d) _____

[Not drawn to scale]

Source: Diagrams from "Trees and Shrubs of NZ", L. Poole, N. Adams.