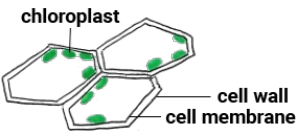
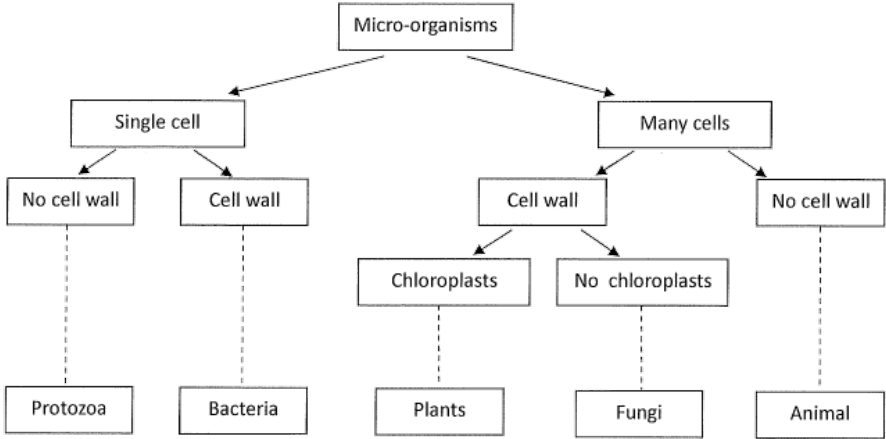


# Key to micro-organisms

This task is about using an identification key.



By using the names on the bottom line of the diagram, classify each of the following as they are viewed under a microscope [not drawn to scale]. Use the labelled diagram to help you answer the questions.

a)



☐ protozoa

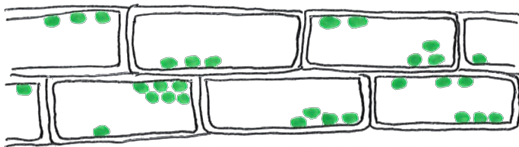
☐ bacteria

☐ plant

☐ fungi

☐ animal

b)



☐ protozoa

☐ bacteria

☐ plant

☐ fungi

☐ animal

c)



☐ protozoa

☐ bacteria

☐ plant

☐ fungi


☐ animal

d)



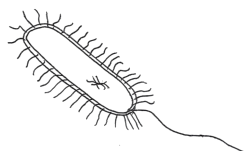
☐ protozoa    ☐ bacteria    ☐ plant    ☐ fungi    ☐ animal

e)



☐ protozoa    ☐ bacteria    ☐ plant    ☐ fungi    ☐ animal

f)



☐ protozoa    ☐ bacteria    ☐ plant    ☐ fungi    ☐ animal

Published on Assessment Resource Banks (<https://arbs.nzcer.org.nz>)