


# Triangle or not?

This task is about identifying whether some shapes are triangles and what makes them triangles.

Three children are talking about whether shapes are triangles or not.



- a) Tom says this is **not** a triangle.  
What do you think?

☐ It's a triangle.

☐ It's **not** a triangle.

Explain why you think this.

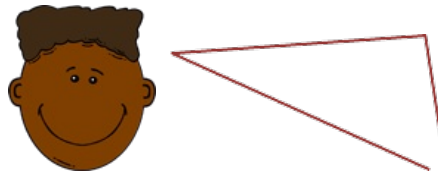


- b) Sarai says this is **not** a triangle.  
What do you think?

☐ It's a triangle.

☐ It's **not** a triangle.

Explain why you think this.



c) Tyler says this is **not** a triangle.  
What do you think?

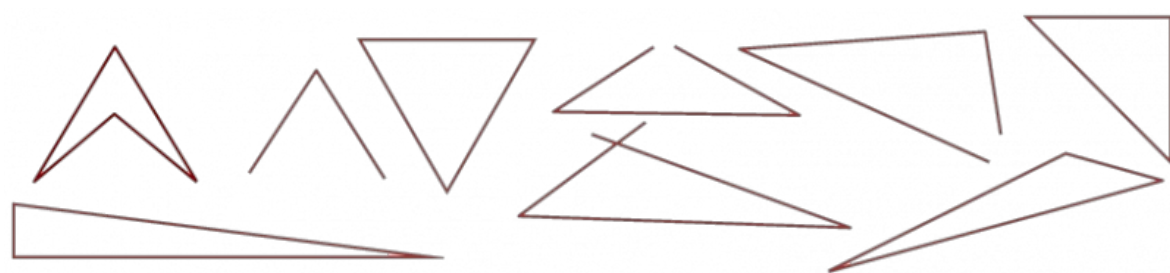
☐ It's a triangle.

☐ It's **not** a triangle.

Explain why you think this.

d) Select **all** the shapes below that are triangles.

<input type="radio"/>		<input type="radio"/>		<input type="radio"/>	
<input type="radio"/>		<input type="radio"/>		<input type="radio"/>	
<input type="radio"/>		<input type="radio"/>		<input type="radio"/>	



e) Describe how you know a shape is a triangle.