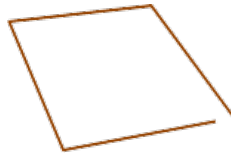


## Square or not?

This task is about identifying whether shapes are squares and what makes them squares.


Some children are talking about whether shapes are squares or not.



- a) Sione says this is **not** a square.  
What do you think?

- ☐ It's a square.
- ☐ It's **not** a square.

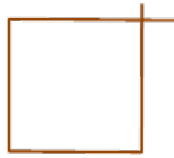
Explain why you think this.



- b) Saane says this is **not** a square.  
What do you think?

- ☐ It's a square.
- ☐ It's **not** a square.

Explain why you think this.



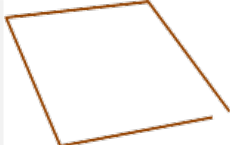
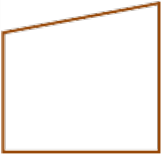

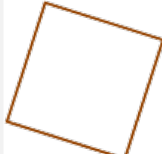





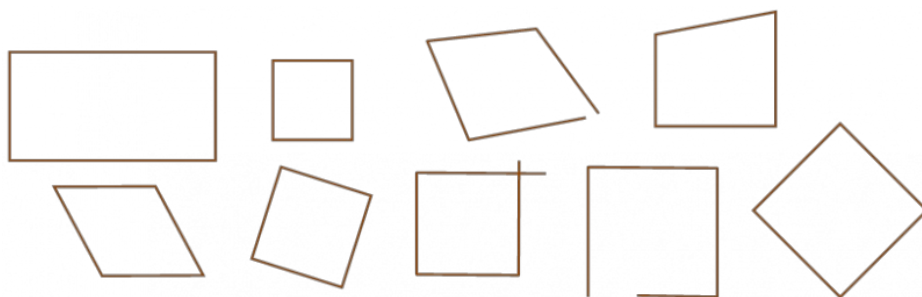
c) Ari says this is **not** a square.  
What do you think?

- ☐ It's a square.
- ☐ It's **not** a square.

Explain why you think this.

d) Select all the shapes below that are squares.

<input type="radio"/> 	<input type="radio"/> 	<input type="radio"/> 
<input type="radio"/> 	<input type="radio"/> 	<input type="radio"/> 
<input type="radio"/> 	<input type="radio"/> 	<input type="radio"/> 



e) Describe how you know if a shape is a square.