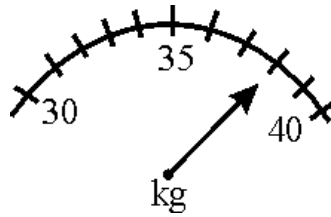


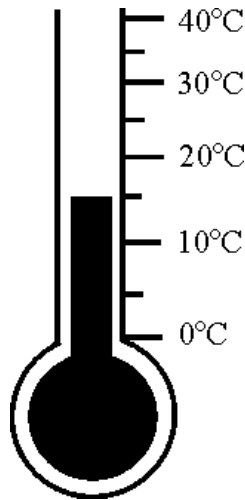
Reading scales III

This task is about reading different types of scales.



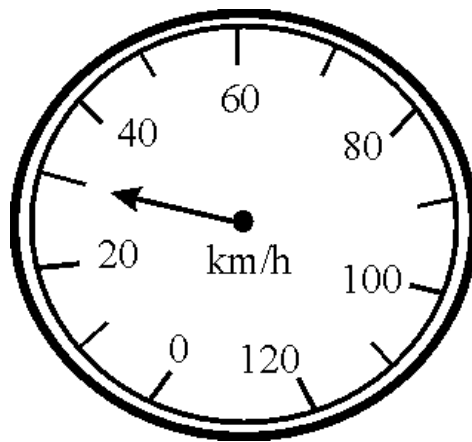
a) Brent weighed his dog on some scales.

How much did Brent's dog weigh? kg



b) Ramona took the temperature of water in a fish bowl.

What was the temperature? degrees C



c) Zac was driving a tractor.

How fast was Zac going? km/h