





Buying some things

This task is about working out change from buying things.

Some friends each saved up \$15 and went shopping.






a) Select all the things that costs under \$15.

<input type="checkbox"/>  Poster \$6.50	<input type="checkbox"/>  CD \$16	<input type="checkbox"/>  Teddy bear \$8.50
<input type="checkbox"/>  Ruby \$19	<input type="checkbox"/>  Pen \$1.50	<input type="checkbox"/>  Photo frame \$5.50

b) Aleisha bought 2 things with her \$15.

She got \$5 change.







Select the 2 things she bought.

<input type="checkbox"/>  Poster \$6.50	<input type="checkbox"/>  CD \$16	<input type="checkbox"/>  Teddy bear \$8.50
<input type="checkbox"/>  Ruby \$19	<input type="checkbox"/>  Pen \$1.50	<input type="checkbox"/>  Photo frame \$5.50

c) Sandra bought 2 things with her \$15.


She got \$3 change.

Select the 2 things she bought.

<input type="checkbox"/>  Poster \$6.50	<input type="checkbox"/>  CD \$16	<input type="checkbox"/>  Teddy bear \$8.50
<input type="checkbox"/>  Ruby \$19	<input type="checkbox"/>  Pen \$1.50	<input type="checkbox"/>  Photo frame \$5.50

d) Geena bought 3 things with her \$15.

Select the 3 things she bought.

<input type="radio"/>  Poster \$6.50	<input type="radio"/>  CD \$16	<input type="radio"/>  Teddy bear \$8.50
<input type="radio"/>  Ruby \$19	<input type="radio"/>  Pen \$1.50	<input type="radio"/>  Photo frame \$5.50

Published on <https://newzealandcurriculum.tahurangi.education.govt.nz>