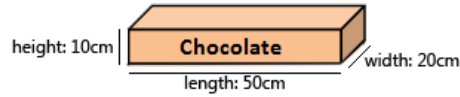


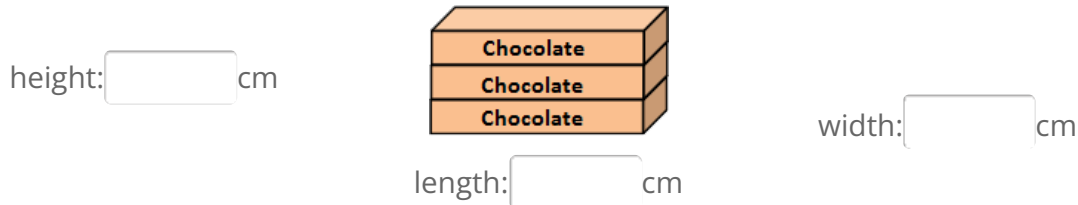
Making chocolate gift packs

This task is about working out height, width and length.

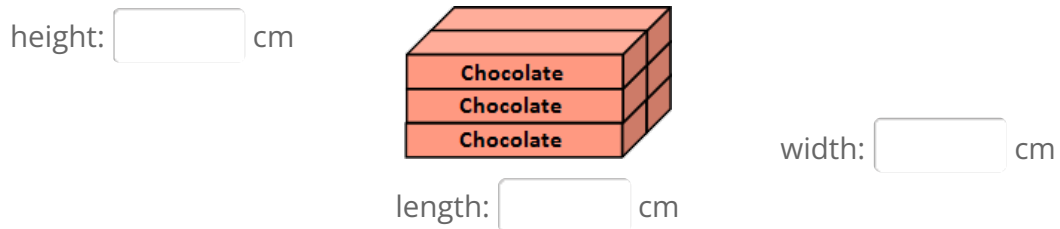
A box of chocolates has these dimensions.



- a) Marsha makes a gift pack of 3 boxes of chocolate.
Write the height, length and width of her gift pack.



- b) Taine makes a gift pack of 6 boxes of chocolate.
Write the height, length and width of his gift pack.



- c) Jo makes a gift pack of 4 boxes of chocolate.
Write the height, length and width of their gift pack.

